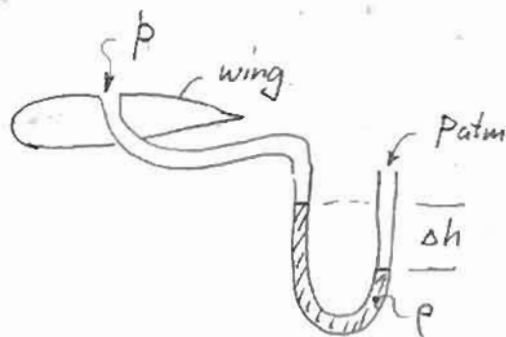


Part A. - Anderson Problem 1.11

U-tube manometer.



$$\text{Given: } p_{atm} = 1.01 \times 10^5 \text{ N/m}^2$$

$$\rho = 1.36 \times 10^4 \text{ kg/m}^3$$

$$g = 9.81 \text{ m/s}^2$$

$$\Delta h = 20 \text{ cm} = 0.2 \text{ m}$$

$$\rightarrow p = p_{atm} - \rho g \Delta h = 7.43 \times 10^{-4} \text{ N/m}^2$$

Part B.

Measured weight = gravity force - buoyancy force

$$F = mg - \rho_{fluid} \cdot V \quad \rightarrow \text{volume of Al}$$

$$\text{Given: } m = 1 \text{ kg} \quad , \quad \text{so } mg = 9.81 \text{ N} \quad \text{same for all cases.}$$

$$\text{Also, } m = \rho_{Al} \cdot V \quad , \quad \text{so } V = m / \rho_{Al} = 1 \text{ kg} / 2700 \text{ kg/m}^3$$

$$\rightarrow V = 3.70 \times 10^{-4} \text{ m}^3$$

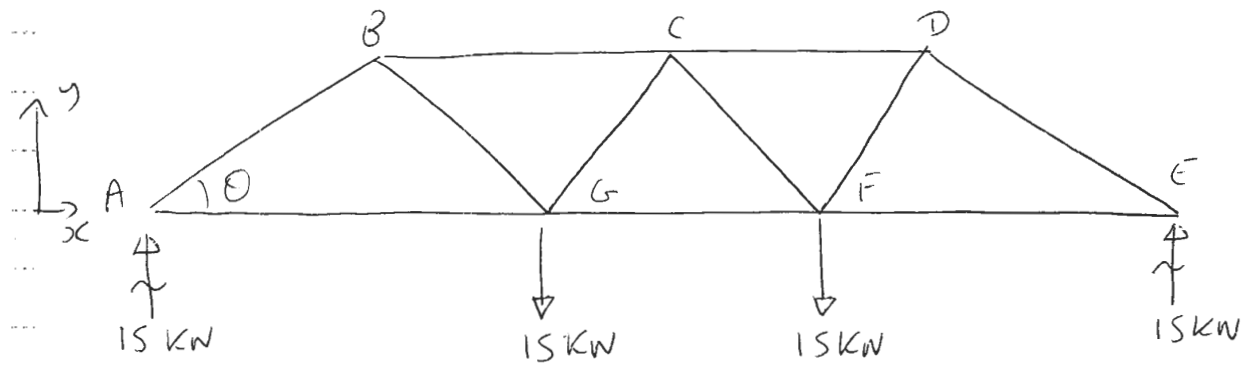
$$\text{Vacuum: } \rho_{fluid} = 0 \quad \rightarrow F = 9.81 \text{ N}$$

$$\text{Air: } \rho_{fluid} = 1.226 \text{ kg/m}^3 \quad \rightarrow F = 9.8096 \text{ N}$$

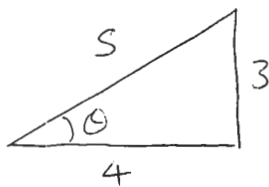
$$\text{Water: } \rho_{fluid} = 1000 \text{ kg/m}^3 \quad \rightarrow F = 9.44 \text{ N}$$

Solutions MS

From M4 FBD with reactions



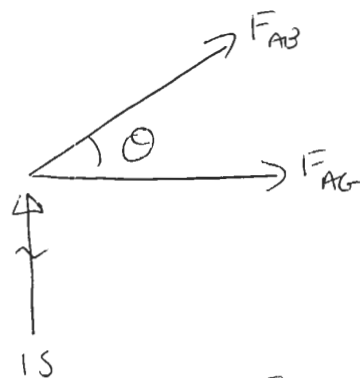
Note



$$\cos \theta = \frac{4}{5} \quad \sin \theta = \frac{3}{5}$$

Use method of joints

Joint A



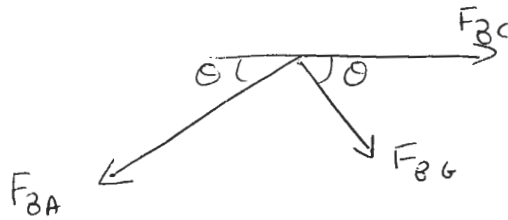
$$\sum \vec{F}_x = 0: F_{AG} + F_{AB} \cos \theta = 0 \quad (1)$$

$$\sum F_y \uparrow = 0: F_{AB} \sin \theta + 15 = 0 \quad (2)$$

$$F_{AB} = -\frac{15}{\sin \theta} = -15 \cdot \frac{5}{3} = \underline{\underline{-25 \text{ kN}}}$$

$$F_{AG} = -F_{AB} \cos \theta = +25 \cdot \frac{4}{5} = +20 \text{ kN}$$

Joint B



$$\sum \vec{F}_x = 0 \quad F_{BC} + F_{BG} \cos \theta - F_{BA} \cos \theta = 0 \quad (3)$$

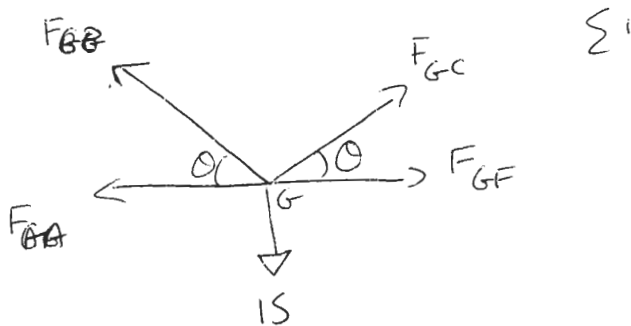
$$\sum F_y \uparrow = 0 \quad -F_{BA} \sin \theta - F_{BG} \sin \theta = 0 \quad (4)$$

from Joint A  $F_{BA} = -25 \text{ kN} \Rightarrow F_{BG} = +25 \text{ kN}$

From (3)  $F_{BC} + 25 \cos \theta - (-25 \cos \theta) = 0$

$$F_{BC} + 50 \frac{4}{5} = 0 \quad F_{BC} = -40 \text{ kN} \in$$

from Joint G



$$\sum \vec{F}_x = 0: \quad -F_{GA} - F_{GB} \cos \theta + F_{GC} \cos \theta + F_{GF} = 0 \quad (5)$$

$$\sum F_y \uparrow = 0 \quad F_{GB} \sin \theta + F_{GC} \sin \theta - 15 = 0 \quad (6)$$

... From joint B  $F_{GB} = +25 \text{ kN}$

... From joint A  $F_{GA} = +20 \text{ kN}$

...  $\therefore \frac{25 \times 3}{5} + F_{GC} \times \frac{3}{5} - 15 = 0$

...  $F_{GC} = 0 \quad \Leftarrow$

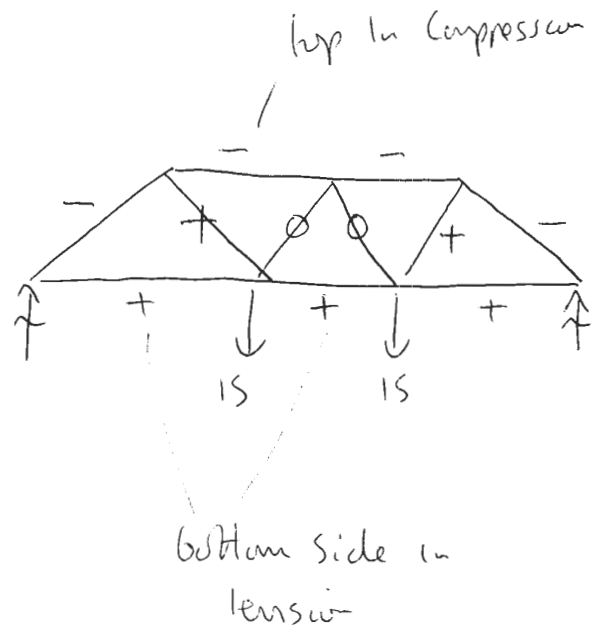
... For G:  $-20 - 25 \times \frac{4}{5} + 0 + F_{GF} = 0$

...  $F_{GF} = +40 \text{ kN}$

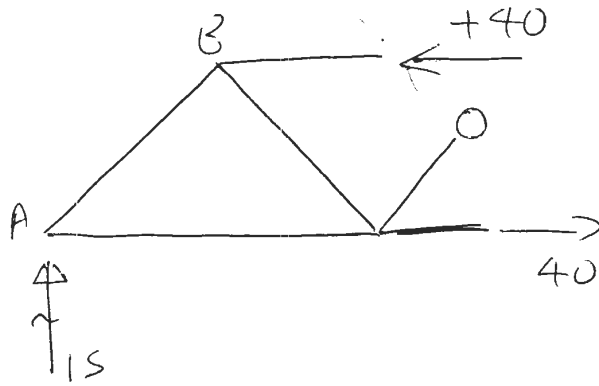
... Have solved for bar forces in LH half of truss. By symmetry, forces in RHS must be identical

... Tabulate

Bar	Force / kN
$F_{AB}$	<del>-25</del>
$F_{AG}$	+20
$F_{BC}$	-40
$F_{BG}$	+25
$F_{GC}$	0
$F_{CF}$	0
$F_{CD}$	-40
$F_{GF}$	+40
$F_{FD}$	+25
$F_{DE}$	-25
$F_{EF}$	+20

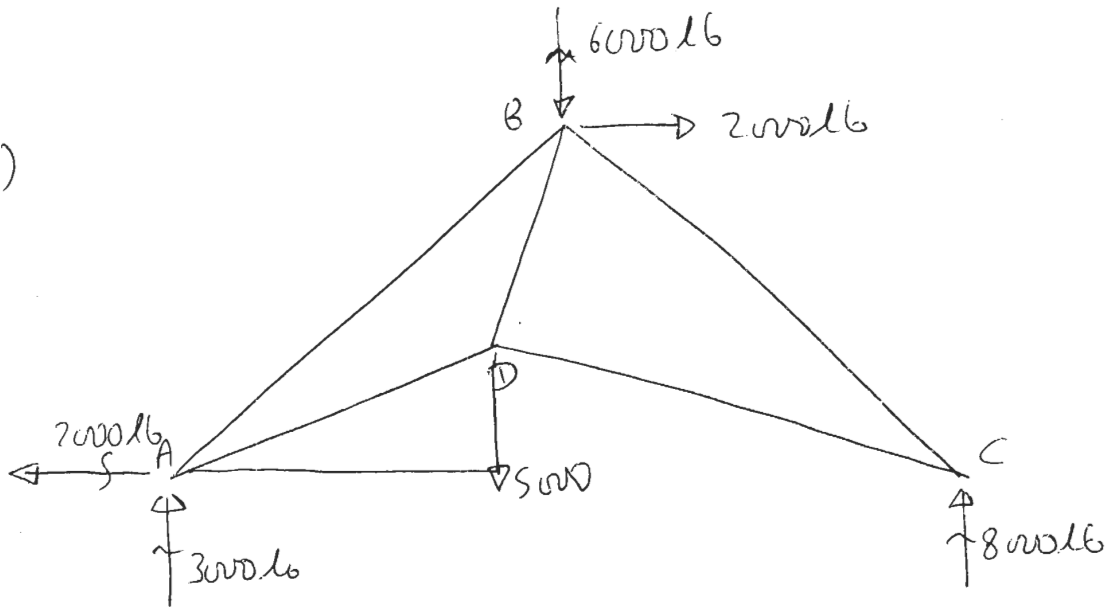


check  
Apply Method of sections



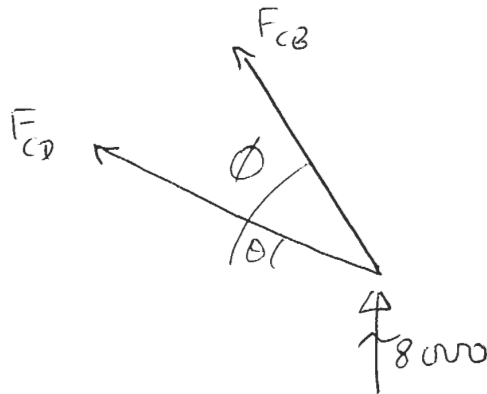
looks right

M6 a)



use Method of joints

at C



$$\cos \theta = \frac{6}{12} = \frac{1}{2}$$

$$\tan \phi = \frac{12}{9} = \frac{4}{3}$$

$$\sum \vec{F}_x = 0: -F_{CD} \cos \theta - F_{CB} \cos \phi = 0 \quad (1)$$

$$\sum F_y \uparrow = 0 \Rightarrow 8000 + F_{CD} \sin \theta + F_{CB} \sin \phi = 0 \quad (2)$$

$$\theta = 26.56 \quad \begin{array}{l} \cos \theta = 0.894 \\ \sin \theta = 0.447 \end{array} \quad \left| \quad \begin{array}{l} \cos \phi = \frac{4}{5} \\ \sin \phi = \frac{3}{5} \end{array} \right.$$

$$-0.894 F_{CD} - \frac{4}{5} F_{CB} = 0 \quad (1)$$

$$0.447 F_{CD} + \frac{3}{5} F_{CB} = -8000 \quad (2)$$

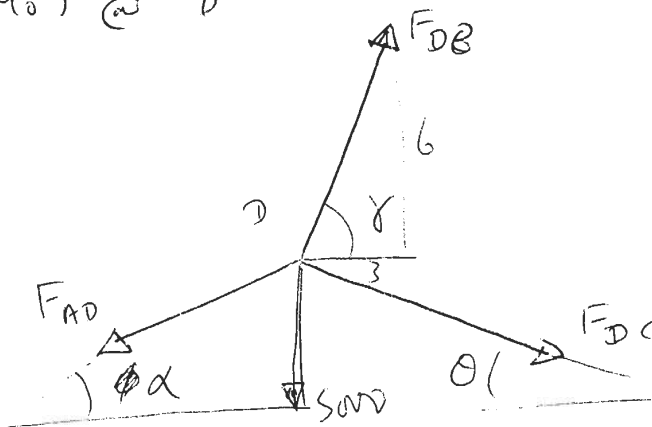
$$(2) \times \frac{4}{3} + (1) \Rightarrow 0.596 F_{CD} = -10666.7$$

$$F_{CD} = -17897 \text{ lb}$$

$$\text{from (1)} \quad F_{CB} = -\frac{5}{4} \times 0.894 (-17897)$$

$$F_{CB} = +20000 \text{ lb}$$

Moment @ D



$$\cos \alpha = \frac{6}{18} = \frac{1}{3} \quad \alpha = 18^\circ$$

$$\cos \alpha = 0.949$$

$$\sin \alpha = 0.316$$

$$\tan \gamma = \frac{6}{3} = 2 \Rightarrow \gamma = 63.4^\circ$$

$$\cos \gamma = 0.447$$

$$\sin \gamma = 0.894$$

$$\sum \vec{F}_x = 0 \quad -F_{AD} \cos \alpha + F_{DC} \cos \theta + F_{DB} \cos \gamma = 0 \quad (3)$$

$$\sum F_y = 0 \quad -F_{AD} \sin \alpha - 5000 - F_{DC} \sin \theta + F_{DB} \sin \gamma = 0 \quad (4)$$

Substitute for  $F_{DC} = -17897 \text{ kN}$

$$(3) \Rightarrow -0.949 F_{AD} - 0.894 \times 17897 + F_{DB} \times 0.447 = 0$$

$$\Rightarrow 0.447 F_{DB} - 0.949 F_{AD} = 16008 \quad (3)$$

$$-0.316 F_{AD} + 0.894 F_{DB} = +3000 \quad (4)$$

$$(4) \times \frac{0.949}{0.316} - (3)$$

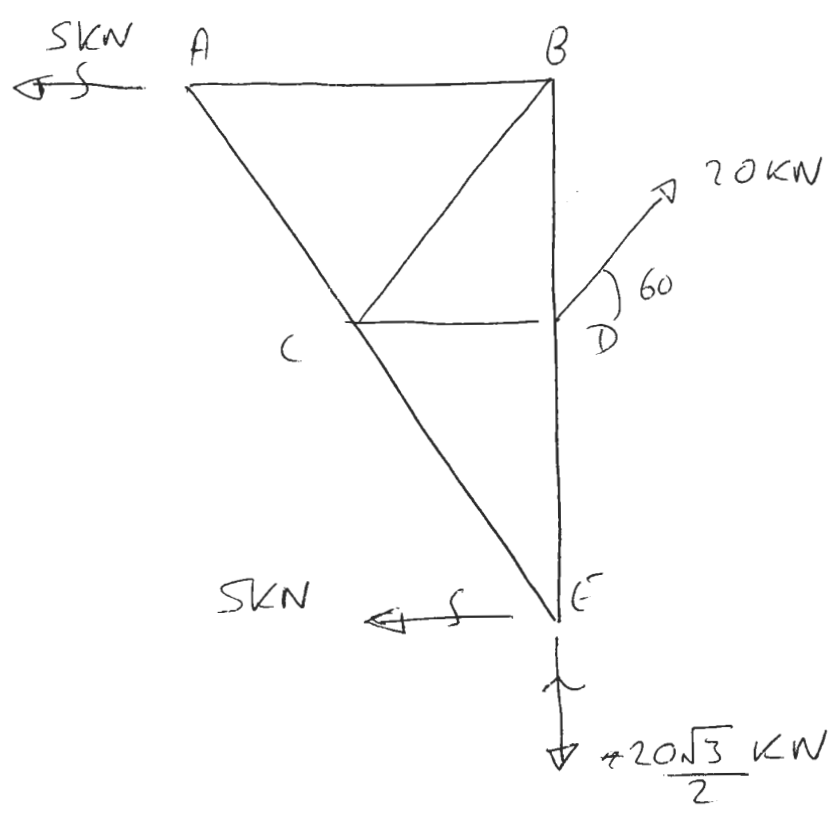
$$\Rightarrow 2.238 F_{DB} = -7000 \text{ lb.}$$

$$F_{DB} = -3127 \text{ lb.} \Leftarrow$$

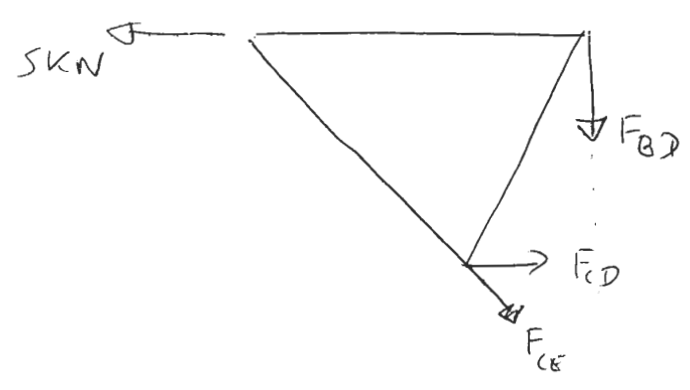


M6

b)



Method of sections

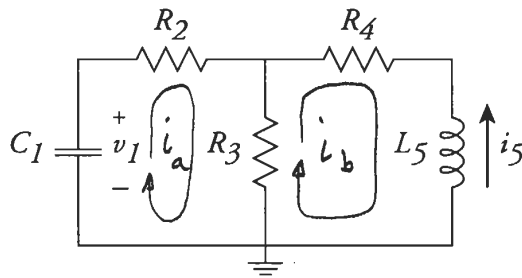


Take moments about E (FBD + FCE intersect)

$$\sum (M_E = 0: + 5 \text{ kN} \cdot 2 \cos 30^\circ - F_{CD} \cos 30^\circ = 0$$

$$F_{CD} = +10 \text{ kN}$$

To solve, you can use the node method or loop method. It's easier with loop method. To solve, write KVL around 2 loops, plus capacitor constitutive law:



$$\dot{i}_a : (R_2 + R_3) i_a - R_3 i_b - v_1 = 0$$

$$\dot{i}_b : -R_3 i_a + \left( R_3 + R_4 + L_5 \frac{d}{dt} \right) i_b = 0$$

$$C_1 : i_a + C_1 \frac{dv_1}{dt} = 0$$

(Note that  $i_a = -C_1 dv_1/dt$ , because  $i_1 = -i_a$ )

Plugging in numbers,

$$\begin{array}{rcl} 8 i_a & - 4 i_b & - v_1 = 0 \\ -4 i_a & + \left( 2 \frac{d}{dt} + 5 \right) i_b & = 0 \\ i_a & & + 0.5 \frac{dv_1}{dt} = 0 \end{array}$$

If we assume that

$$\begin{array}{l} i_a(t) = I_a e^{st} \\ i_b(t) = I_b e^{st} \\ v_1(t) = V_1 e^{st} \end{array}$$

then the above equations become

$$\begin{aligned}
 8I_a - 4I_b - V_1 &= 0 \\
 -4I_a + (2s + 5)I_b &= 0 \\
 I_a + 0.5s &= 0
 \end{aligned}$$

In matrix form,

$$\underbrace{\begin{bmatrix} 8 & -4 & -1 \\ -4 & 2s+5 & 0 \\ 1 & 0 & 0.5s \end{bmatrix}}_{M(s)} \begin{bmatrix} I_a \\ I_b \\ V_1 \end{bmatrix} = 0$$

For this equation to have a solution,

$$\det(M(s)) = 0$$

$$\begin{aligned}
 &= 8 \left[ (2s+5)(0.5s) - (0)(0) \right] \\
 &+ 4 \left[ (-4)(0.5s) - (1)(0) \right] \\
 &- 1 \left[ (-4)(0) - (1)(2s+5) \right] \\
 &= (4s(2s+5)) - 8s + 2s + 5 \\
 &= 8s^2 + 14s + 5 = 0
 \end{aligned}$$

The roots are

$$s_1 = -1.25 \text{ sec}^{-1}$$

$$s_2 = -0.5 \text{ sec}^{-1}$$



Now find the characteristics vectors:

$$s_1 = -1.25:$$

$$M(s_1) = \begin{bmatrix} 8 & -4 & -1 \\ -4 & 2.5 & 0 \\ 1 & 0 & -0.625 \end{bmatrix}$$

$M(s_1)$  can be row-reduced to obtain

$$\begin{bmatrix} 1 & -1/2 & -1/8 \\ 0 & 1 & -1 \\ 0 & 0 & 0 \end{bmatrix} \begin{bmatrix} I_a \\ I_b \\ V_1 \end{bmatrix} = \underline{0}$$

One solution is

$$\begin{bmatrix} I_a \\ I_b \\ V_1 \end{bmatrix} = \begin{bmatrix} 5/8 \\ 1 \\ 1 \end{bmatrix}$$

Similarly, for  $s_2 = -0.5$ ,

$$M(s_2) = \begin{bmatrix} 8 & -4 & -1 \\ 4 & 4 & 0 \\ -1 & 0 & -0.25 \end{bmatrix}$$

which can be row-reduced to obtain

$$\begin{bmatrix} 1 & -1/2 & -1/8 \\ 0 & 1 & -1/4 \\ 0 & 0 & 0 \end{bmatrix} \begin{bmatrix} I_a \\ I_b \\ V_1 \end{bmatrix} = \underline{0}$$

A solution is

$$\begin{bmatrix} I_a \\ I_b \\ V_1 \end{bmatrix} = \begin{bmatrix} 1 \\ 1 \\ 4 \end{bmatrix}$$

The general solution is then

$$\begin{pmatrix} i_a(t) \\ i_b(t) \\ v_1(t) \end{pmatrix} = a \begin{pmatrix} 5/8 \\ 1 \\ 1 \end{pmatrix} e^{-1.25t} + b \begin{pmatrix} 1 \\ 1 \\ 4 \end{pmatrix} e^{-0.5t}$$

The initial conditions are

$$v_1(0) = 2V = a + 4b$$

$$\Rightarrow a + 4b = 2$$

$$i_s(0) = 1A = -i_b(0) = -a - b$$

$$\Rightarrow -a - b = 1$$

In matrix form,

$$\begin{bmatrix} 1 & 4 \\ -1 & -1 \end{bmatrix} \begin{bmatrix} a \\ b \end{bmatrix} = \begin{bmatrix} 2 \\ 1 \end{bmatrix}$$

The solution is

$$a = -2$$

$$b = 1$$

Therefore,

$$\begin{aligned}v_1(t) &= a e^{-1.25t} + 4b e^{-0.5t} \\ &= (-2 e^{-1.25t} + 4 e^{-0.5t}) \text{ volts}\end{aligned}$$

$$\begin{aligned}i_5(t) &= -i_6(t) \\ &= -a e^{-1.25t} - b e^{-0.5t} \\ &= (2 e^{-1.25t} - e^{-0.5t}) \text{ amps}\end{aligned}$$

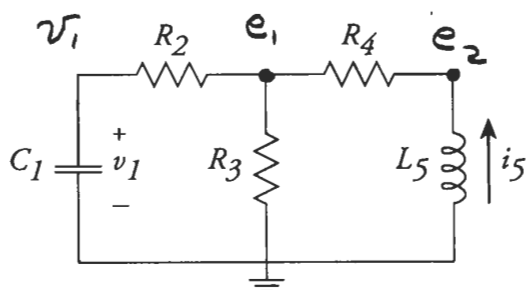


To find state-space equations for this system,

- ① Treat  $v_1, i_5$  as sources
- ② Find  $\dot{i}_1, v_5$  in terms of  $v_1, i_5$
- ③ Use constitutive laws to find

$$\frac{d}{dt} v_1, \frac{d}{dt} i_5$$

We can use the loop method or node method. I will use the node method (even though loop method would have one fewer equation)



The node equations are:

$$\begin{aligned} e_1: & (G_2 + G_3 + G_4) e_1 - G_4 e_2 = G_2 v_1 \\ e_2: & -G_4 e_1 + G_4 e_2 = i_5 \end{aligned}$$

Plugging in numbers,

$$\begin{aligned} 1.5 e_1 - e_2 &= 0.25 v_1 \\ -e_2 + e_2 &= i_5 \end{aligned}$$

Solving (by row reduction or matrix inverse),

$$\begin{pmatrix} e_1 \\ e_2 \end{pmatrix} = \begin{pmatrix} 0.5v_1 + 2i_5 \\ 0.5v_1 + 3i_5 \end{pmatrix}$$

Now, find  $\dot{v}_1, \dot{i}_5$

$$\dot{v}_1 = \frac{1}{C_1} \dot{i}_1 = 2\dot{i}_1$$

$i_1$  can be found by applying KCL @  $v_1$ :

$$\dot{i}_1 + \frac{v_1 - e_1}{R_2} = 0$$

$$\Rightarrow \dot{i}_1 = \frac{e_1 - v_1}{R_2} = \frac{1}{4} [(0.5v_1 + 2i_5) - v_1]$$

$$= -0.125v_1 + 0.5i_5$$

$$\Rightarrow \dot{v}_1 = 2\dot{i}_1 = -0.25v_1 + i_5$$

To find  $\dot{i}_5$ , use

$$\dot{i}_5 = \frac{1}{L_5} v_5 = \frac{1}{L_5} (-e_2)$$

$$= \frac{1}{2} (-0.5v_1 - 3i_5)$$

$$= -0.25v_1 - 1.5i_5$$

Therefore,

$$\frac{d}{dt} \begin{bmatrix} v_1 \\ i_5 \end{bmatrix} = \begin{bmatrix} -0.25 & 1 \\ -0.25 & -1.5 \end{bmatrix} \begin{bmatrix} v_1 \\ i_5 \end{bmatrix}$$